

THE UNITED REPUBLIC OF TANZANIA,  
PRIME MINISTER'S OFFICE  
REGIONAL ADMINISTRATION AND LOCAL GOVERNMENTS



## MARTIN LUTHER SCHOOL

P. O. Box 1786 Dodoma. Tel. +255 26 2395029, +255 784 449098

Fax +255 26 2395030 ([www.martinlutherschooldodoma.sc.tz](http://www.martinlutherschooldodoma.sc.tz))

*"High Quality Education for the New Generation"*

## STANDARD II

### HEALTHCARE – HOLIDAY PACKAGE JUNE 2026

PUPIL'S NAME: \_\_\_\_\_

### INSTRUCTIONS

1. Remember to write your three names properly.
2. Answer all the questions as per instructions.
3. Read all questions carefully before answering.
4. This holiday package should be returned to school when we open.

NAME: \_\_\_\_\_ CLASS II: \_\_\_\_\_

**For question 1 – 25 choose the correct response from the given alternatives and write it in the space provided.**

1. Among the following which is “NOT” a living thing?  
A. School      B. Plant      C. Animal      [   ]

2. Cheetah, leopard and human being are example of:  
A. Environment      B. Living things      [   ]  
C. Non-living things

3. Which of the following show example of non-living thing in our environment?  
A. Cat      B. tree      C. Stone      [   ]

4. Everything that surround us is called:      [   ]  
A. Home      B. School      C. Environment

5. Living things are things which have?  
A. Space      B. Life      C. Nose      [   ]

6. What is the benefit of trees in our environment?  
A. To get fresh air      B. To get milk      C. To get eggs      [   ]

7. Two examples of animals that lives at home are:      [   ]  
A. Cat and lion      B. Cat and dog      C. Lion and cat

8. What is an example of non-living things?  
A. Banana plant      B. Table      C. Cow      [   ]

9. Which of the following things are produced from plants?  
A. Milk and egg      B. Meat and honey      C. Maize and rice      [   ]

10. Which of the following animals lays eggs?  
A. Elephant      B. Donkey      C. Hens      [   ]

**NAME:** \_\_\_\_\_ **CLASS II:** \_\_\_\_\_

- 11.** Which of the following is a wild animal?  
A. Pig                      B. Zebra                      C. Horse                      [   ]
- 12.** Which of these animals does NOT lives in water?  
A. Fish                      B. Dolphin                      C. Monkey                      [   ]
- 13.** Which animal is commonly used in police activities?  
A. Lion                      B. Tiger                      C. Dog                      [   ]
- 14.** Which tame animal gives us milk?  
A. Horse                      B. Pig                      C. Cow                      [   ]
- 15.** Which habitat is home to animals such as crab, shark and dolphin?  
A. Grass land                      B. Water                      C. Forest                      [   ]
- 16.** Our teacher told us "Living things are in two main groups, these are:  
A. Plants and animals    B. Plants and non-living things  
C. Living things and non-living things                      [   ]
- 17.** In our environment there are two main groups of plants, these are:  
A. Maize plants and avocado plants                      B. Flowering plants and non-flowering plants  
C. Sugarcane plant and groundnut                      [   ]
- 18.** Fish is a good example of living things which live in:  
A. Forest                      B. Water                      C. Grassland                      [   ]
- 19.** A human being lives on:  
A. Land                      B. Water                      C. Air                      [   ]

**NAME:** \_\_\_\_\_ **CLASS II:** \_\_\_\_\_

**20.** Which of the following living things attract rainfall in our environment?

Animals B. Insects C. Tree [ ]

**21.** What does a sign with white and black stripes means:

A. Pedestrian crossing B. Zebra crossing C. Children crossing [ ]

**22.** What do a sign with a flame indicate? [ ]

A. Flammable materials B. First Aid C. High voltage

**23.** A sign with skull crossbones means;

A. First Aid B. Danger ahead C. Toxic [ ]

**24.** A sign with a cigarette inside and a diagonal line means;

A. Smoking allowed B. No smoking C. No fire [ ]

**25.** A triangular sign with a pedestrian symbol means; [ ]

A. No walking B. No running C. Pedestrian crossing

**For question 26 – 28 mentions any three characteristics of living things:**

**26.** \_\_\_\_\_

**27.** \_\_\_\_\_

**28.** \_\_\_\_\_

**For question 29 and 30 mention any two benefits of domestic animals:**

**29.** \_\_\_\_\_

**30.** \_\_\_\_\_

NAME: \_\_\_\_\_ CLASS II: \_\_\_\_\_

**For question 31 – 35 mention five examples of living things;**

- 31. \_\_\_\_\_
- 32. \_\_\_\_\_
- 33. \_\_\_\_\_
- 34. \_\_\_\_\_
- 35. \_\_\_\_\_

**For question 36 – 40 mention five examples of non- living things;**

- 36. \_\_\_\_\_
- 37. \_\_\_\_\_
- 38. \_\_\_\_\_
- 39. \_\_\_\_\_
- 40. \_\_\_\_\_

**From questions 41-44 write down common places where safety signs are found.**

- 41. ....
- 42. ....
- 43. ....
- 44. ....

**For question 45-47 list tools used by John when he brushes his teeth every day morning?**

- 45. \_\_\_\_\_
- 46. \_\_\_\_\_
- 47. \_\_\_\_\_

NAME: \_\_\_\_\_ CLASS II: \_\_\_\_\_

For question 48-50 mention the function of each sensory organ below:

- 48. Nose is used for \_\_\_\_\_
- 49. Eyes are used for \_\_\_\_\_
- 50. Ears are used for \_\_\_\_\_

For question 51 – 55, write the names of the following living things and non- living things.

51.



\_\_\_\_\_

52.



\_\_\_\_\_

53.



\_\_\_\_\_

54.



\_\_\_\_\_

NAME: \_\_\_\_\_ CLASS II: \_\_\_\_\_



\_\_\_\_\_

From question 56 – 59 name the following pictures.



\_\_\_\_\_



\_\_\_\_\_




\_\_\_\_\_



\_\_\_\_\_


From questions 60 – 63 Study the following pictures carefully and write the benefit of each in the space provided.



.....


NAME: \_\_\_\_\_ CLASS II: \_\_\_\_\_

61.




.....

62.



.....


63.




.....

For question 64 – 68 draw the following signs.


64. Bridge ahead



65. Danger ahead




66. Zebra crossing




NAME: \_\_\_\_\_ CLASS II: \_\_\_\_\_

67. Bus stop



68. Traffic light




From question 69 – 71 draw a line to match safety sign below with their meaning.

69.




Railway crossing

70.



Danger ahead

71.



High voltage

NAME: \_\_\_\_\_ CLASS II: \_\_\_\_\_

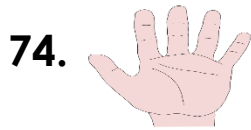
From question 72 – 76 match the pictures with their names by using lines.



Hand



Fire



Eyes



Tooth paste



Short trousers

For question 77 – 100 write TRUE for the correct statement and FALSE for incorrect statement. Write your answer in the space provided.

77. Toes, foot, thigh and chin are parts of the head \_\_\_\_\_

78. We breath and smell with our nose \_\_\_\_\_

79. Nail cutter is used to dry the body \_\_\_\_\_

80. We iron clothes to kill germs: \_\_\_\_\_

81. We use eye for hearing \_\_\_\_\_

82. Cats and Dogs are used for security? \_\_\_\_\_

83. Oxen are animals that are used for farming \_\_\_\_\_

84. Human being grow from being babies to adults \_\_\_\_\_

85. Example of waste product from the body are hen, frog and lion \_\_\_\_\_

**NAME:** \_\_\_\_\_ **CLASS II:** \_\_\_\_\_

86. All plants and all animals are living things \_\_\_\_\_
87. We get cassava, potatoes and beans from plant:  
\_\_\_\_\_
88. Pine plant, cactus plant and cypress plant are flowering plant:  
\_\_\_\_\_
89. Eggplant, pawpaw plant, maize plant are non-flowering plant:  
\_\_\_\_\_
90. We get fire wood and charcoal from plants: \_\_\_\_\_
91. The collection of many trees makes a forest: \_\_\_\_\_
92. All animals have a habitat \_\_\_\_\_
93. Lion's lives in the oceans \_\_\_\_\_
94. Animal can live without a habitat \_\_\_\_\_
95. Wild animals hunt for their food \_\_\_\_\_
96. A cat is not a domestic animal because can eat \_\_\_\_\_
97. Lions, Rhino, Cow, Zebra are pet animals \_\_\_\_\_
98. Living things and non-living things are component of the environment \_\_\_\_\_
99. Cow, Goat and Sheep they often eat meat: \_\_\_\_\_
100. Dog, Cat, Parrot, Fish, Hen are pet animals \_\_\_\_\_

***“Education is my life” (Proverb 4:13)***

Tel: + 255 26 239 5029/ + 255 784 449 098 website: [www.martinlutherschooldodoma.sc.tz](http://www.martinlutherschooldodoma.sc.tz)