

THE UNITED REPUBLIC OF TANZANIA,
PRIME MINISTER'S OFFICE
REGIONAL ADMINISTRATION AND LOCAL GOVERNMENTS



MARTIN LUTHER SCHOOL

P. O. Box 1786 Dodoma. Tel. +255 26 2395029, +255 784 449098

Fax +255 26 2395030 (www.martinlutherschooldodoma.sc.tz)

"High Quality Education for the New Generation"

STANDARD I

ARITHMETICS – HOLIDAY PACKAGE JUNE 2026

PUPIL'S NAME: _____

INSTRUCTIONS

- 1. Remember to write your three names properly.**
- 2. Answer all the questions as per instructions.**
- 3. Read all questions carefully before answering.**
- 4. This holiday package should be returned to school when we open.**

NAME _____ CLASS I: _____

In question 1-5 write the numbers in words.

1. 0 _____

2. 95 _____

3. 7 _____

4. 28 _____

5. 19 _____

In question 6-10 write the numbers in figures.

6. One hundred _____

7. Twenty three _____

8. Eight _____

9. Fifty four _____


10. Seventy nine _____

In questions 11 – 13 count and tick the correct numbers.

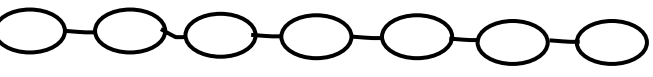
11.  =

| | | |
|---|---|---|
| 3 | 9 | 6 |
|---|---|---|

NAME _____ CLASS I: _____

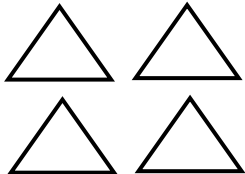
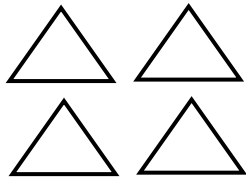
12.  =

| | | |
|---|---|---|
| 7 | 6 | 5 |
|---|---|---|

13.  =

| | | |
|---|---|---|
| 8 | 7 | 5 |
|---|---|---|

Add and write the answer in figures questions 14 and 15

14.  +  = _____

15.  +  = _____

16. Add $44 + 2 =$ _____

17. Write 65 in words = _____

In question 18 -21 arrange the numbers in ascending order

18. 8, 3, 9, 5, 7.

19. two, zero, four, one, three.

NAME _____ CLASS I: _____

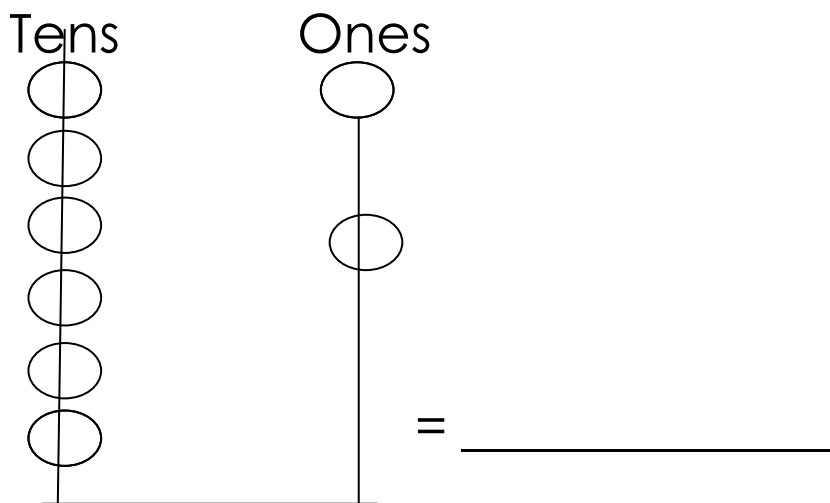
20. 14, 16, 15, 18, 17.

21. 89, 64, 55, 73, 100.

22. What is the number before 54? = _____

23. Write the number between 78 and 80 in words
= _____

24. Count the beads and write the number in figures.



In question 25- 29 write the digits of the place values given.

25. Seventeen = _____ ones _____ tens.

26. _____ tens _____ ones = 45.

NAME _____ CLASS I: _____

27. Ninety = _____ ones _____ tens.

28. 81 = _____ tens _____ ones.

29. Ten = _____ ones _____ tens.

In question 30-33 circle the digit in the place value of.

30. Tens in 5 4

31. Ones in 2 3

32. Tens in 6 6

33. Ones in 4 2

Circle the smallest numbers in question 34 to 38.

34. 12, 1, 9, 14.

35. 10, 36, 41, 27.

36. 9, 6, 5, 8.

37. 48, 23, 92, 71.

38. 16, 19, 14, 18.

In question 39 – 48 add the numbers.

39. Seven plus four = _____

40. 16 + 20 = _____

41. Seven + twenty one = _____

NAME _____ CLASS I: _____

42. 43

$$\begin{array}{r} + 5 \\ \hline \\ \hline \end{array}$$

43. Eight plus eleven = _____

44. 21 + 21 = _____

45. 70

$$\begin{array}{r} + 19 \\ \hline \\ \hline \end{array}$$

46. Sixty + eighteen = _____

47. 92 + 7 = _____

48. 78 + 10 = _____

For question 49 – 57 subtract the numbers.

49. 15 – 9 = _____

50. Six minus six = _____

51. 72 – 10 = _____

52. 55

$$\begin{array}{r} - 33 \\ \hline \\ \hline \end{array}$$

NAME _____ CLASS I: _____

53. Eighty - twenty = _____

54. 95

- 15

55. 75 minus 21 = _____

56. 63 - 63 = _____

57. 85 take away 33 = _____

In question 58-64 fill in the missing numbers.

58. _____, 16, _____, 18.

59. Sixty, sixty one, _____, sixty three.

60. 20, _____, 22, _____.

61. _____, seventeen, eighteen, nineteen.

62. 0, _____, 2, 3.

63. 23, _____, 25, 26.

64. 11, 12, _____, 14.

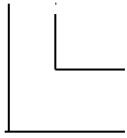
Identify ones and tens from question 65– 70.

65. Thirty = _____ ones _____ tens.

66. 20 = _____ tens _____ ones.

NAME _____ CLASS I: _____

67. 7 3



68. _____ ones _____ Tens = sixty four.

69. _____ Tens _____ ones = 96

70. Write in words the digit in tens from
number 47 = _____

**For the question number 71 – 75, find the missing
number in the box.**

71. + 10 = 45

72. 7 + 27 =

73. + 19 = 43

74. + 60 = 61

75. + 18 = 99

In question 76 - 80 write numbers from abacus.

76. Tens


ones



= _____

NAME _____ CLASS I: _____

77. ones tens



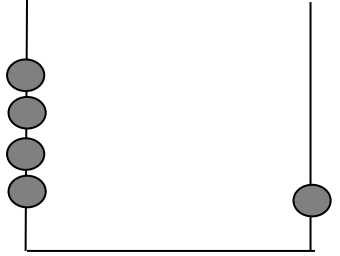
= _____

78. Tens ones



= _____

79. ones tens



= _____

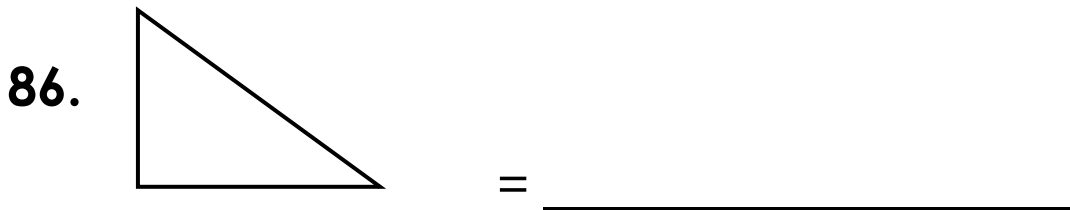
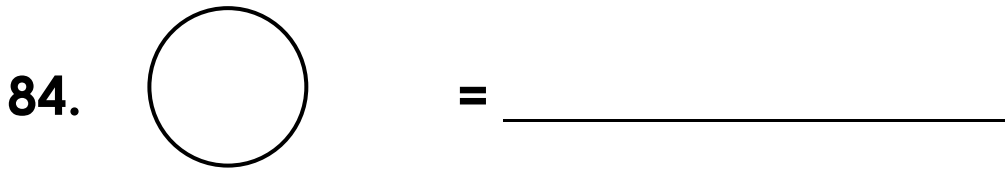
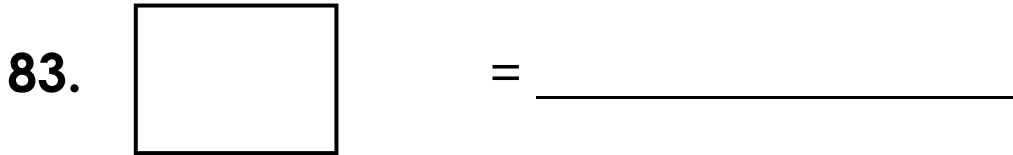
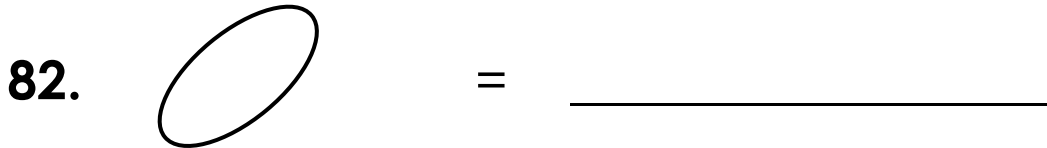
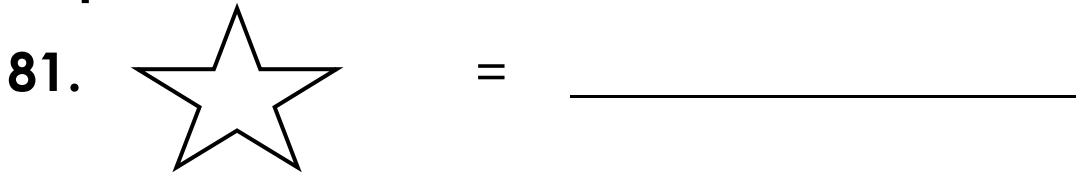
80. ones tens



= _____

NAME _____ CLASS I: _____

In question 81-86, write the names of the shapes.



NAME _____ CLASS I: _____

87. Write twenty three in figure = _____

88. Twelve minus five = _____

89. Which number is at the middle of 27 and 29? _____

90. Fifteen balls plus more fifteen balls = _____

91. Write two numbers that comes after 60 _____,

92. Add 43 to 6 = _____

93. 88 minus 50 = _____

94. What is the place value of 0 in 90? _____

95. Write 67 in words =

In question 96-100 draw the shapes of the given names inside the box

96. Star



97. Circle



NAME _____ CLASS I: _____


98. Oval



99. Triangle



100. Rectangle



Education is my life (Proverbs 4:13)

Tel: + 255262395029/+255784449098 Website: www.martinlutherschooldodoma.sc.tz